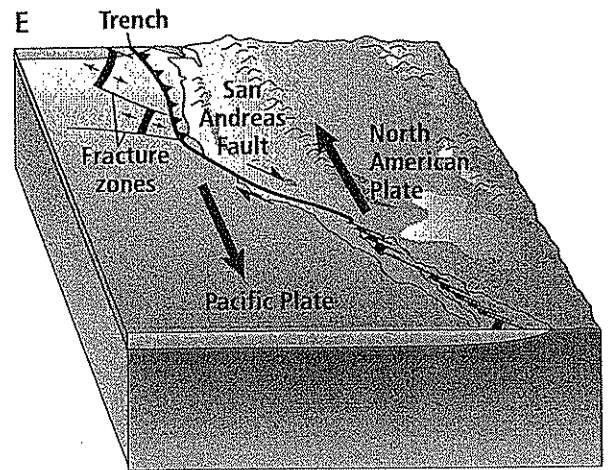
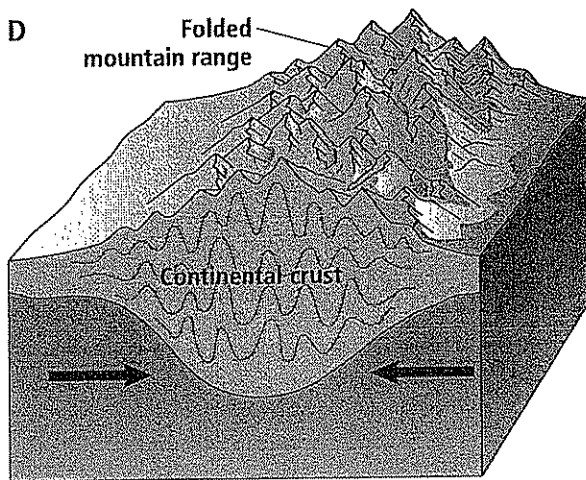
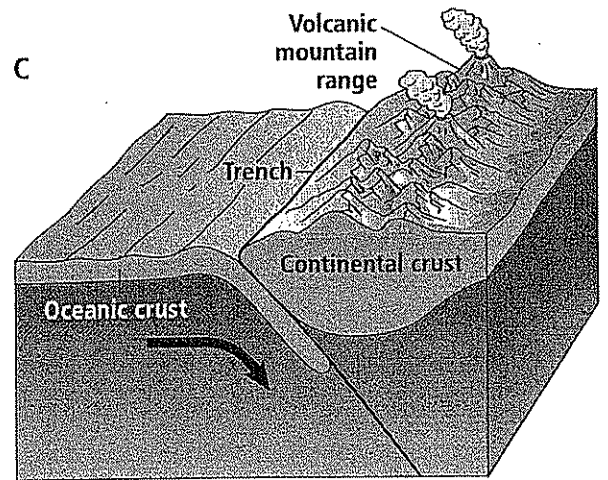
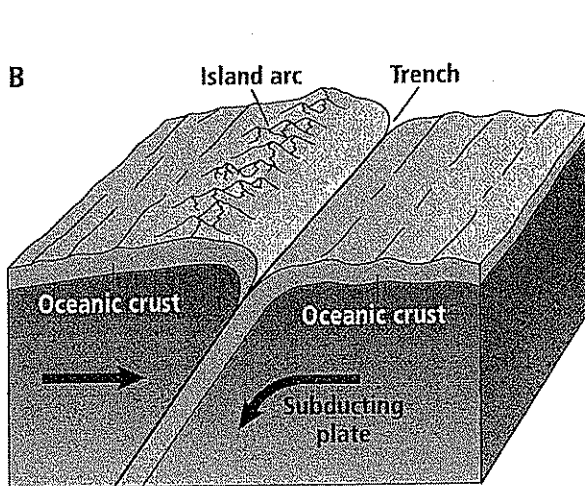
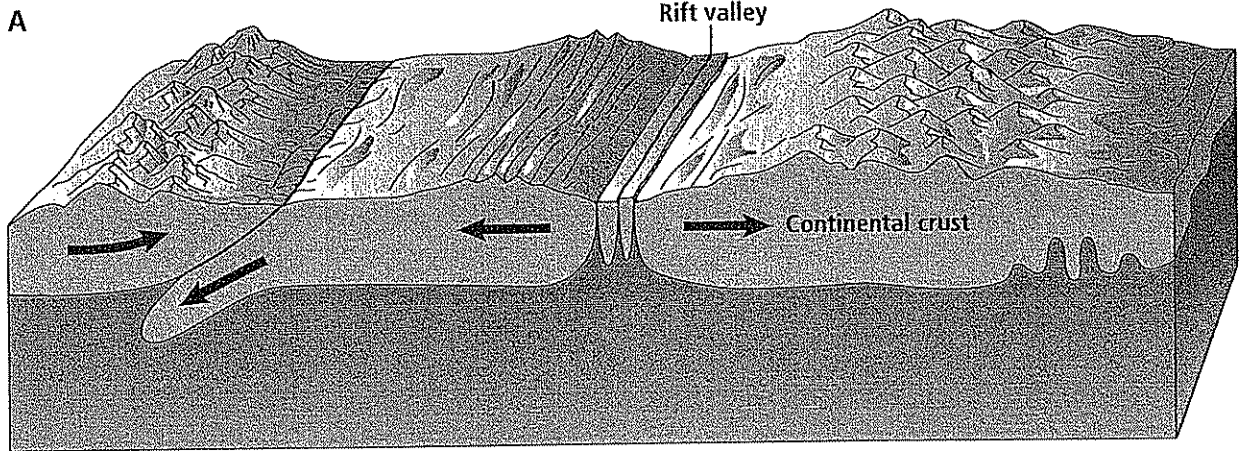


# Types of Plate Boundaries



Copyright © Glencoe/McGraw-Hill, a division of The McGraw-Hill Companies, Inc.

# Types of Plate Boundaries

1. Which diagram shows a divergent boundary? How do the plates move relative to each other at this type of boundary?

---

2. At a divergent boundary, what feature forms when two oceanic plates are involved? When two continental plates are involved?

---

3. Which diagram shows oceanic-oceanic convergence? Describe what occurs at this type of plate boundary.

---

---

4. The Himalayas are mountains that are forming as a result of the collision of the Indian and Eurasian continental plates. Which diagram shows a plate boundary like the one involved in the formation of these mountains?

---

5. Which diagram shows oceanic-continental convergence? Describe what occurs at this type of plate boundary.

---

---

---

6. Which diagram shows a transform boundary? Describe what occurs at this type of plate boundary.

---

---